

Centre No.						Paper Reference					Surname	Initial(s)		
Candidate No.						6	6	6	4	/	0	1	Signature	

Paper Reference(s)  
**6664/01**

# Edexcel GCE

## Core Mathematics C2

### Advanced Subsidiary

Monday 11 January 2010 – Morning  
Time: 1 hour 30 minutes

Examiner's use only		
Team Leader's use only		

Question Number	Leave Blank
1	
2	
3	
4	
5	
6	
7	
8	
9	
Total	

**Materials required for examination**  
Mathematical Formulae (Pink or Green)

**Items included with question papers**  
Nil

Candidates may use any calculator allowed by the regulations of the Joint Council for Qualifications. Calculators must not have the facility for symbolic algebra manipulation, differentiation and integration, or have retrievable mathematical formulae stored in them.

#### Instructions to Candidates

In the boxes above, write your centre number, candidate number, your surname, initials and signature. Check that you have the correct question paper. Answer ALL the questions. You must write your answer to each question in the space following the question. When a calculator is used, the answer should be given to an appropriate degree of accuracy.

#### Information for Candidates

A booklet 'Mathematical Formulae and Statistical Tables' is provided. Full marks may be obtained for answers to ALL questions. The marks for individual questions and the parts of questions are shown in round brackets: e.g. (2). There are 9 questions in this question paper. The total mark for this paper is 75. There are 24 pages in this question paper. Any blank pages are indicated.

#### Advice to Candidates

You must ensure that your answers to parts of questions are clearly labelled. You should show sufficient working to make your methods clear to the Examiner. Answers without working may not gain full credit.

This publication may be reproduced only in accordance with Edexcel Limited copyright policy. ©2010 Edexcel Limited.

Printer's Log. No.  
**N35101A**

W850/R6664/57570 3/5/5/3



Turn over



2. (a) Show that the equation

$$5 \sin x = 1 + 2 \cos^2 x$$

can be written in the form

$$2 \sin^2 x + 5 \sin x - 3 = 0 \tag{2}$$

(b) Solve, for  $0 \leq x < 360^\circ$ ,

$$2 \sin^2 x + 5 \sin x - 3 = 0 \tag{4}$$

Horizontal lines for writing the solution.

(Total 6 marks)

Q2





4.

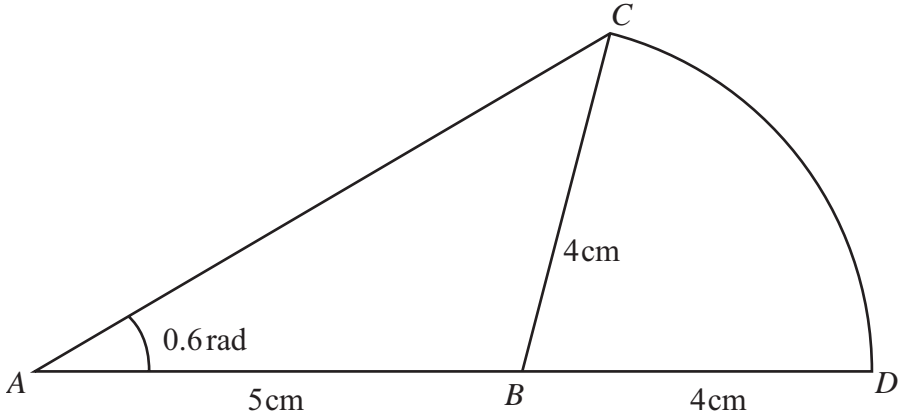


Figure 1

An emblem, as shown in Figure 1, consists of a triangle  $ABC$  joined to a sector  $CBD$  of a circle with radius 4 cm and centre  $B$ . The points  $A, B$  and  $D$  lie on a straight line with  $AB = 5$  cm and  $BD = 4$  cm. Angle  $BAC = 0.6$  radians and  $AC$  is the longest side of the triangle  $ABC$ .

(a) Show that angle  $ABC = 1.76$  radians, correct to 3 significant figures. (4)

(b) Find the area of the emblem. (3)

---

---

---

---

---

---

---

---

---

---

---

---

---

---

---

---

---

---

---

---

---

---

---

---





6. A car was purchased for £18000 on 1st January.  
On 1st January each following year, the value of the car is 80% of its value on 1st January in the previous year.

(a) Show that the value of the car exactly 3 years after it was purchased is £9216. (1)

The value of the car falls below £1000 for the first time  $n$  years after it was purchased.

(b) Find the value of  $n$ . (3)

An insurance company has a scheme to cover the maintenance of the car.  
The cost is £200 for the first year, and for every following year the cost increases by 12% so that for the 3rd year the cost of the scheme is £250.88

(c) Find the cost of the scheme for the 5th year, giving your answer to the nearest penny. (2)

(d) Find the total cost of the insurance scheme for the first 15 years. (3)

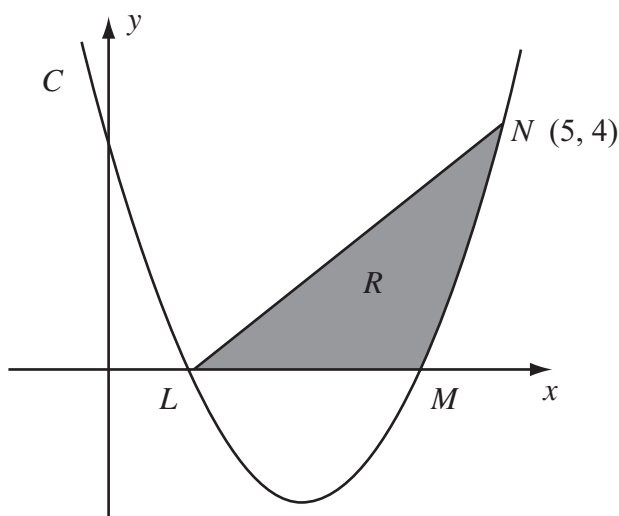
Horizontal lines for writing answers.







7.



**Figure 2**

The curve  $C$  has equation  $y = x^2 - 5x + 4$ . It cuts the  $x$ -axis at the points  $L$  and  $M$  as shown in Figure 2.

(a) Find the coordinates of the point  $L$  and the point  $M$ . (2)

(b) Show that the point  $N(5, 4)$  lies on  $C$ . (1)

(c) Find  $\int (x^2 - 5x + 4) dx$ . (2)

The finite region  $R$  is bounded by  $LN$ ,  $LM$  and the curve  $C$  as shown in Figure 2.

(d) Use your answer to part (c) to find the exact value of the area of  $R$ . (5)

---

---

---

---

---

---

---

---

---

---

---

---

---

---

---

---

---

---

---

---

---

---

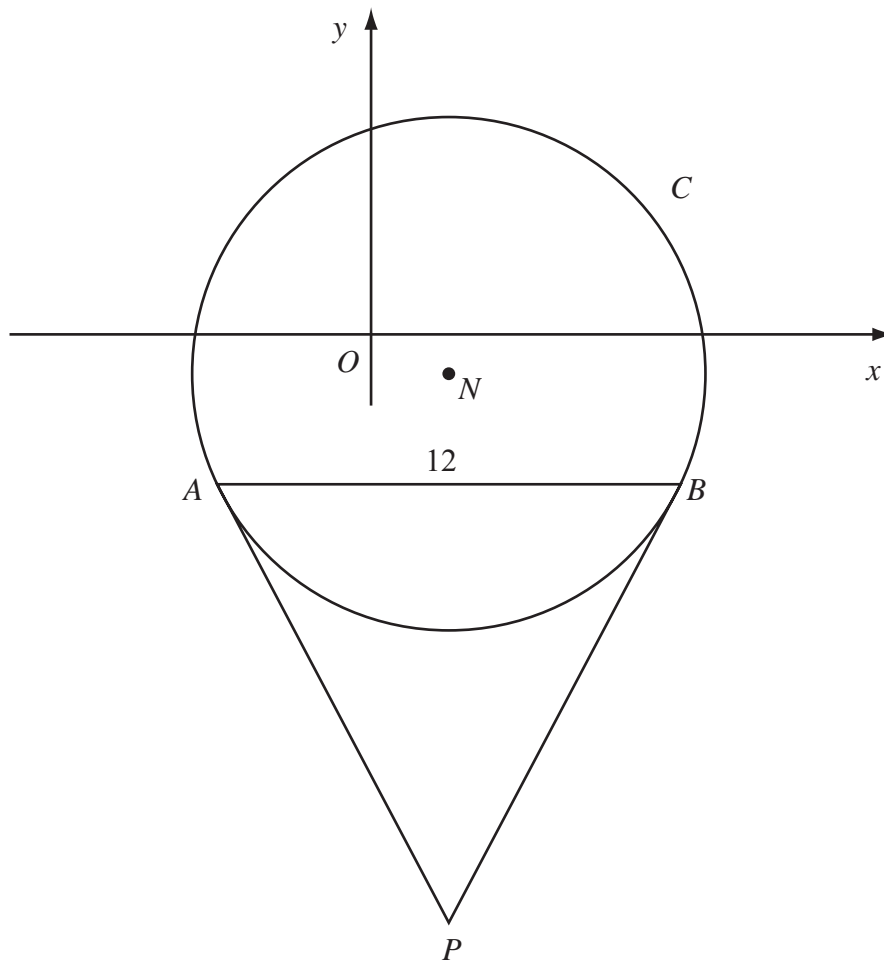
---

---





8.



**Figure 3**

Figure 3 shows a sketch of the circle  $C$  with centre  $N$  and equation

$$(x - 2)^2 + (y + 1)^2 = \frac{169}{4}$$

(a) Write down the coordinates of  $N$ . (2)

(b) Find the radius of  $C$ . (1)

The chord  $AB$  of  $C$  is parallel to the  $x$ -axis, lies below the  $x$ -axis and is of length 12 units as shown in Figure 3.

(c) Find the coordinates of  $A$  and the coordinates of  $B$ . (5)

(d) Show that angle  $ANB = 134.8^\circ$ , to the nearest 0.1 of a degree. (2)

The tangents to  $C$  at the points  $A$  and  $B$  meet at the point  $P$ .

(e) Find the length  $AP$ , giving your answer to 3 significant figures. (2)







